

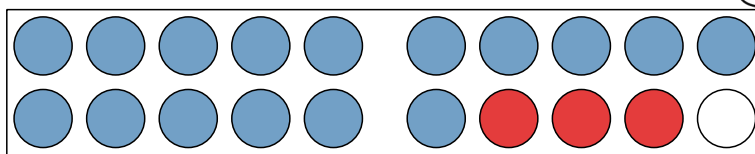
Domaća zadaća



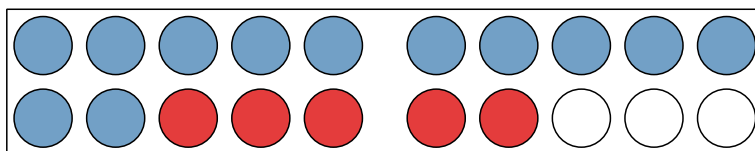
1. U krovu se nalazi zbroj.

19	
	8
6	
	15
10	
	10
	0
	3
13	
	7

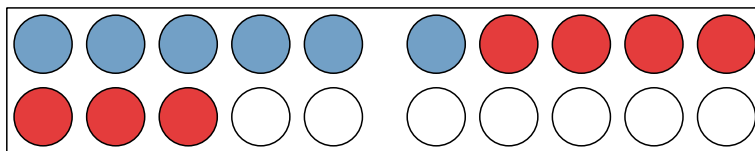
2. Zbroji plave i crvene kružice.



$$___ + ___ = ___$$



$$___ + ___ = ___$$



$$___ + ___ = ___$$

3. Izračunaj, teže zadatke računaj uz pomoć štapića, bojica ili sličnog materijala.

$$14 + 2 = ___ \quad 5 + 10 = ___ \quad 10 + 6 = ___ \quad 6 + 14 = ___$$

$$15 + 1 = ___ \quad 12 + 5 = ___ \quad 2 + 1 = ___ \quad 14 + 3 = ___$$

$$0 + 1 = ___ \quad 4 + 7 = ___ \quad 7 + 12 = ___ \quad 15 + 5 = ___$$

$$9 + 0 = ___ \quad 5 + 14 = ___ \quad 4 + 8 = ___ \quad 6 + 9 = ___$$

$$1 + 7 = ___ \quad 4 + 2 = ___ \quad 2 + 18 = ___ \quad 17 + 0 = ___$$

$$11 + 4 = ___ \quad 11 + 5 = ___ \quad 0 + 12 = ___ \quad 8 + 11 = ___$$

$$14 + 1 = ___ \quad 4 + 16 = ___ \quad 9 + 11 = ___ \quad 13 + 1 = ___$$

$$15 + 0 = ___ \quad 10 + 7 = ___ \quad 13 + 0 = ___ \quad 7 + 13 = ___$$

$$4 + 5 = ___ \quad 9 + 9 = ___ \quad 17 + 1 = ___ \quad 1 + 18 = ___$$

4. Prati strelice i računaj.



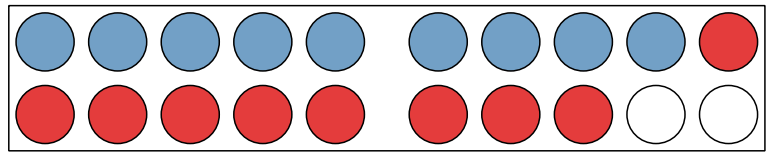
Domaća zadaća - 2.dio



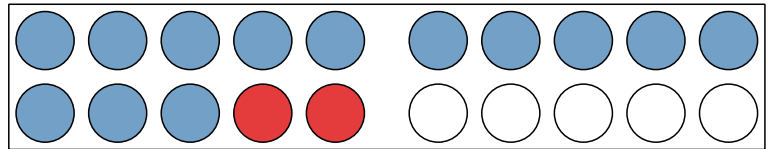
1. U krovu se nalazi zbroj.

15	
5	
3	
0	
	6
	11
13	
10	
	1
15	

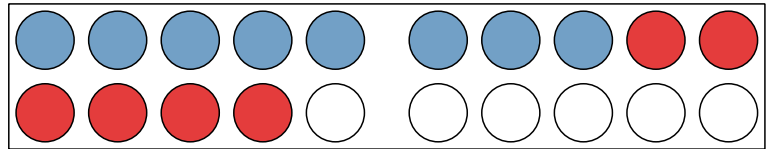
2. Zbroji plave i crvene kružice.



$$___ + ___ = ___$$



$$___ + ___ = ___$$



$$___ + ___ = ___$$

3. Izračunaj, teže zadatke računaj uz pomoć štapića, bojica ili sličnog materijala.

$$11 + 0 = ___$$

$$0 + 3 = ___$$

$$0 + 16 = ___$$

$$12 + 7 = ___$$

$$6 + 14 = ___$$

$$10 + 4 = ___$$

$$17 + 2 = ___$$

$$12 + 5 = ___$$

$$4 + 14 = ___$$

$$0 + 13 = ___$$

$$5 + 1 = ___$$

$$7 + 0 = ___$$

$$3 + 7 = ___$$

$$10 + 2 = ___$$

$$7 + 9 = ___$$

$$14 + 3 = ___$$

$$3 + 13 = ___$$

$$2 + 13 = ___$$

$$14 + 0 = ___$$

$$13 + 4 = ___$$

$$0 + 9 = ___$$

$$6 + 13 = ___$$

$$12 + 8 = ___$$

$$7 + 6 = ___$$

$$13 + 1 = ___$$

$$4 + 15 = ___$$

$$7 + 1 = ___$$

$$9 + 8 = ___$$

$$10 + 9 = ___$$

$$8 + 11 = ___$$

$$6 + 10 = ___$$

$$4 + 4 = ___$$

$$14 + 2 = ___$$

$$10 + 5 = ___$$

$$5 + 3 = ___$$

$$10 + 3 = ___$$

4. Prati strelice i računaj.

